


Arbeiten mit der Hunderterkette




Name: _____

Griffel

© Valerie Würz

Download unter www.griffel-verlag.de

Arbeiten mit der Hunderterkette



Name: _____

Griffel

© Valerie Würz

Download unter www.griffel-verlag.de

Trage die Nachbarzehner ein.
 Unterstreiche den näheren Nachbarzehner.

	92	
--	----	--

	86	
--	----	--

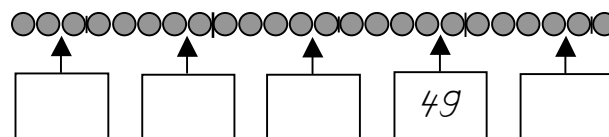
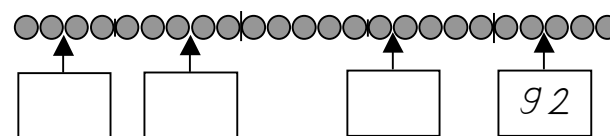
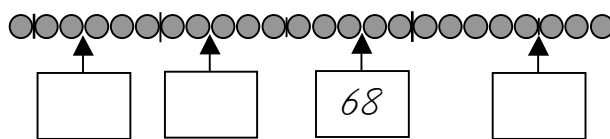
	72	
--	----	--

	98	
--	----	--

	34	
--	----	--

	44	
--	----	--

Trage die fehlenden Zahlen ein



Trage die Nachbarzehner ein.
 Unterstreiche den näheren Nachbarzehner.

	92	
--	----	--

	86	
--	----	--

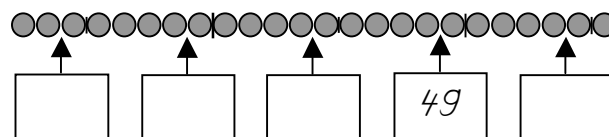
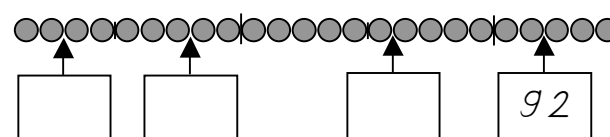
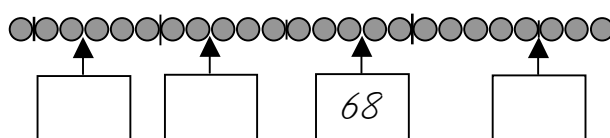
	72	
--	----	--

	98	
--	----	--

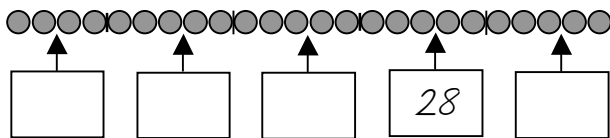
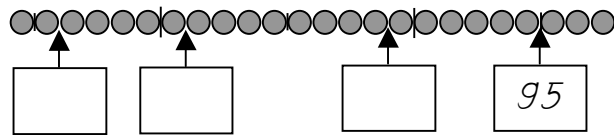
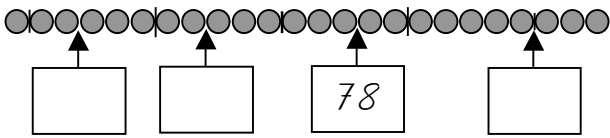
	34	
--	----	--

	44	
--	----	--


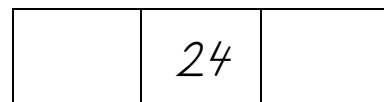
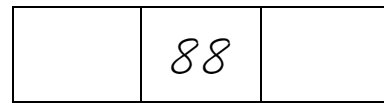
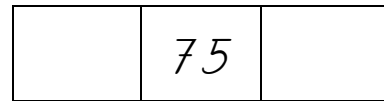
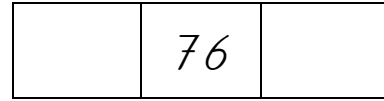
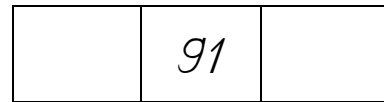
Trage die fehlenden Zahlen ein



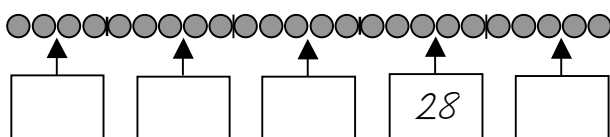
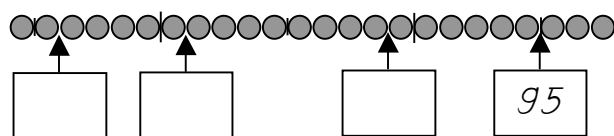
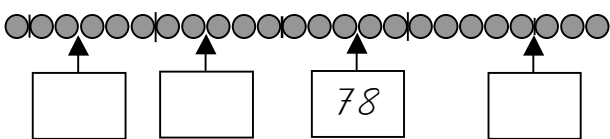
Trage die fehlenden Zahlen ein




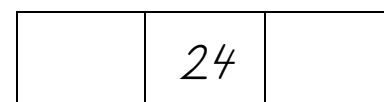
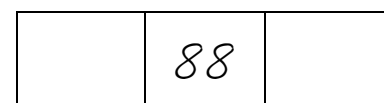
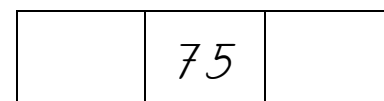
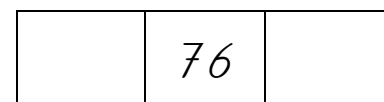
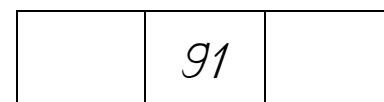
Trage die Nachbarzehner ein.
Unterstreiche den näheren Nachbarzehner.



Trage die fehlenden Zahlen ein



Trage die Nachbarzehner ein.
Unterstreiche den näheren Nachbarzehner.



Trage die Nachbarzehner ein.
 Unterstreiche den näheren Nachbarzehner.

	92	
--	----	--

	86	
--	----	--

	72	
--	----	--

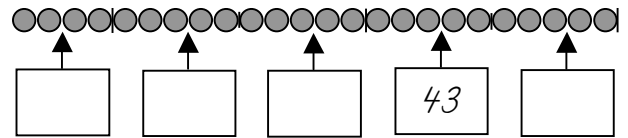
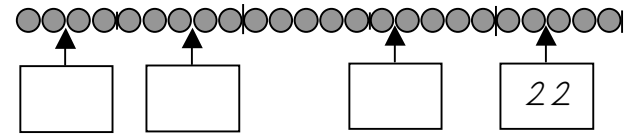
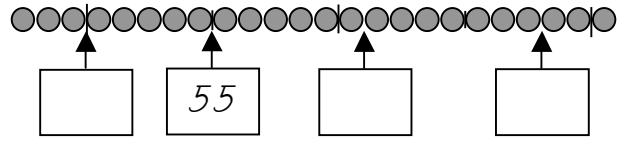
	98	
--	----	--

	34	
--	----	--

	44	
--	----	--

10

Trage die fehlenden Zahlen ein



3

Trage die Nachbarzehner ein.
 Unterstreiche den näheren Nachbarzehner.

	92	
--	----	--

	86	
--	----	--

	72	
--	----	--

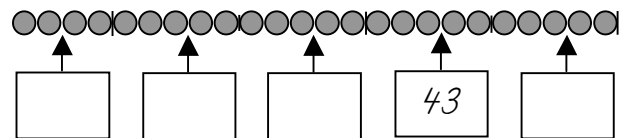
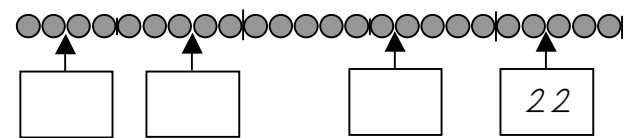
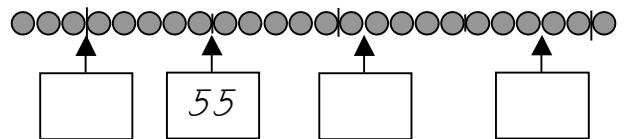
	98	
--	----	--

	34	
--	----	--

	44	
--	----	--

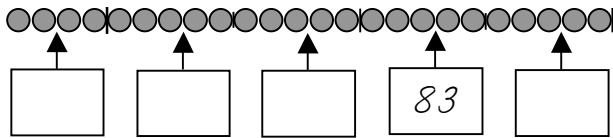
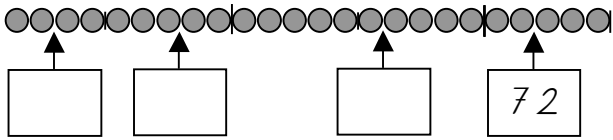
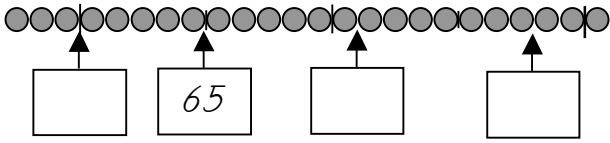
10

Trage die fehlenden Zahlen ein



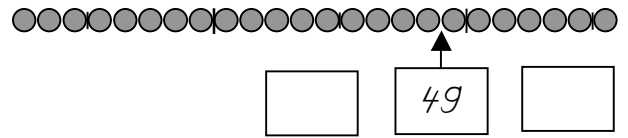
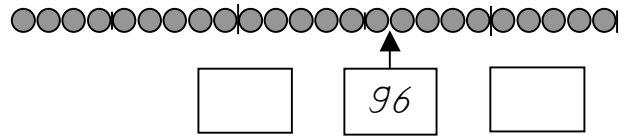
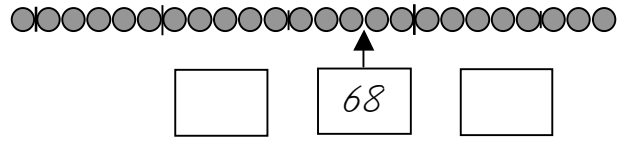
3

Trage die fehlenden Zahlen ein



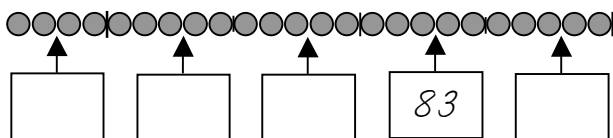
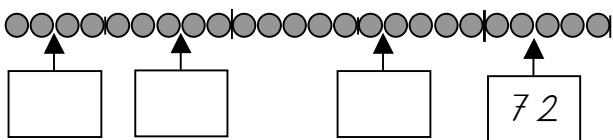
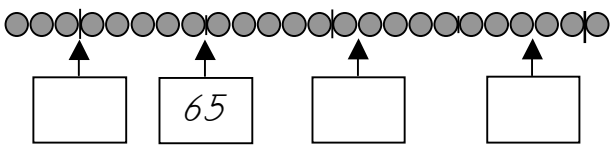
4

Trage die Nachbarzehner ein
Unterstreiche den näheren Nachbarzehner.



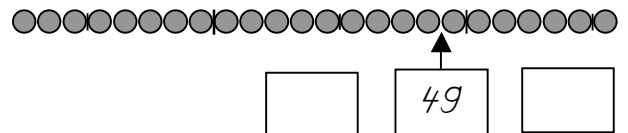
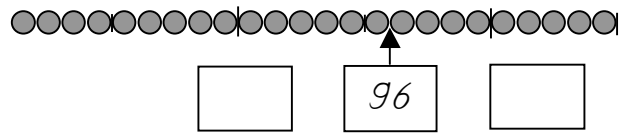
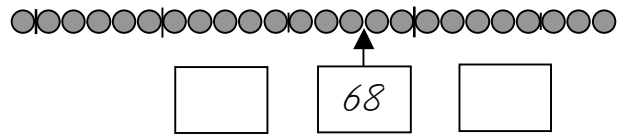
9

Trage die fehlenden Zahlen ein



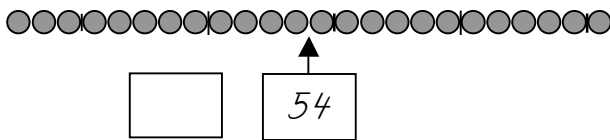
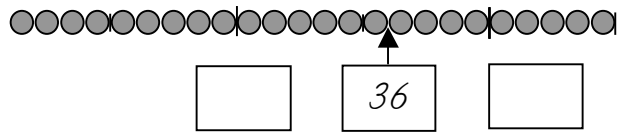
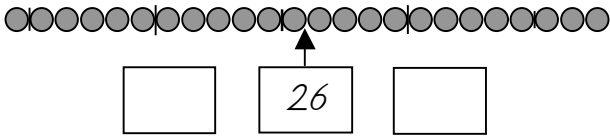
4

Trage die Nachbarzehner ein
Unterstreiche den näheren Nachbarzehner.

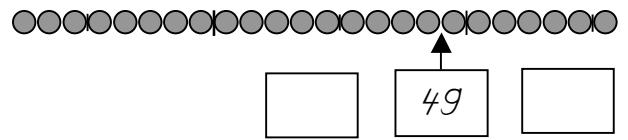
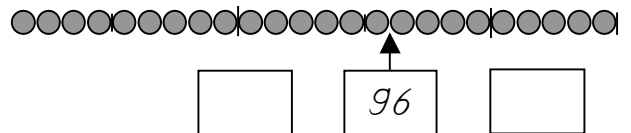
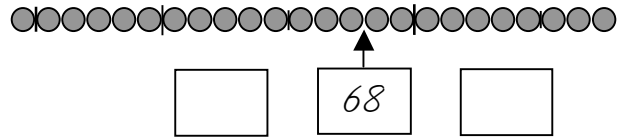


9

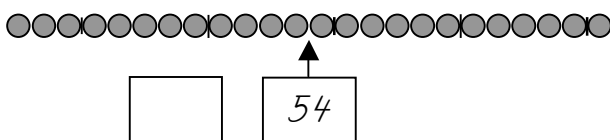
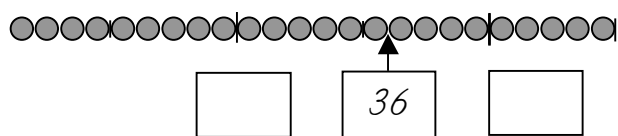
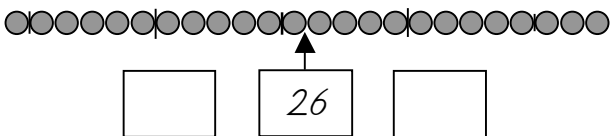
Trage die Nachbarzehner ein Unterstreiche den näheren Nachbarzehner.



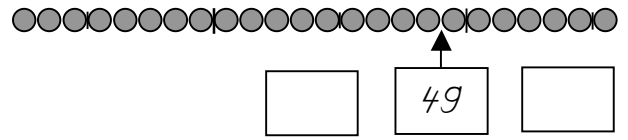
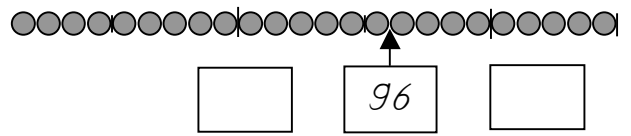
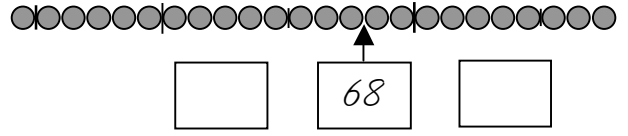
Trage Vorgänger und Nachfolger ein.



Trage die Nachbarzehner ein Unterstreiche den näheren Nachbarzehner.



Trage Vorgänger und Nachfolger ein.



Trage Vorgänger und Nachfolger ein.

	91	
--	----	--

	88	
--	----	--

	76	
--	----	--

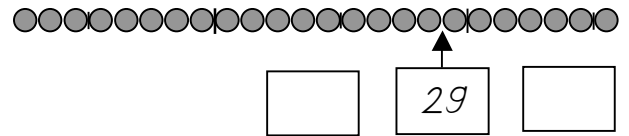
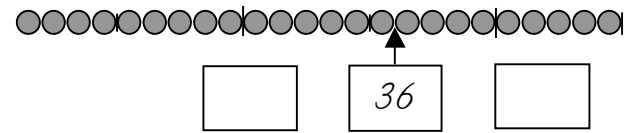
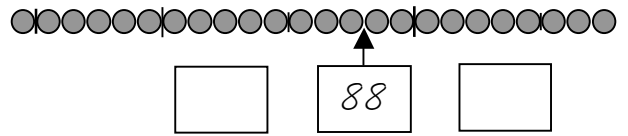
	95	
--	----	--

	32	
--	----	--

	37	
--	----	--

6

Trage die Nachbarzehner ein.
Unterstreiche den näheren Nachbarzehner.



7

Trage Vorgänger und Nachfolger ein.

	91	
--	----	--

	88	
--	----	--

	76	
--	----	--

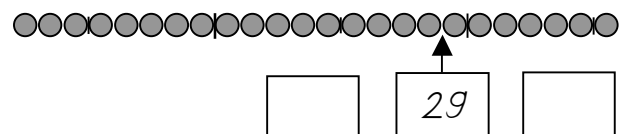
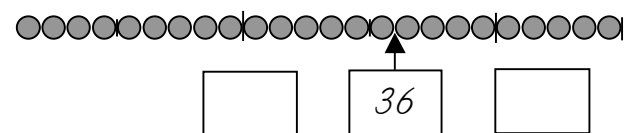
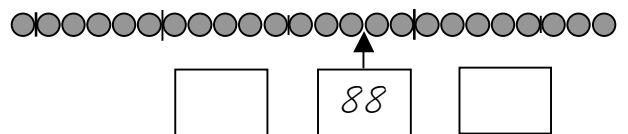
	95	
--	----	--

	32	
--	----	--

	37	
--	----	--

6

Trage die Nachbarzehner ein.
Unterstreiche den näheren Nachbarzehner.



7